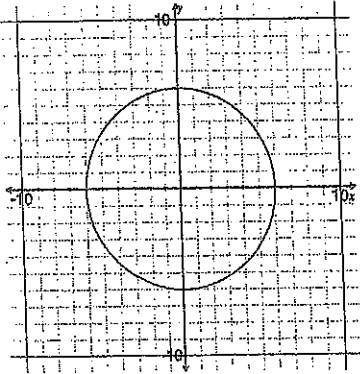


2-3 Homework

Functions Worksheet 1

For exercises 1-6, decide whether each graph is the graph of a function. Then determine domain and range.

1.

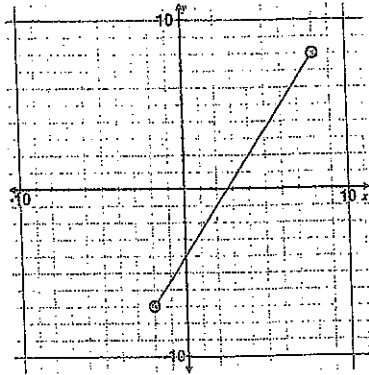


(a) Is it a function?

(b) Domain:

(c) Range:

2.

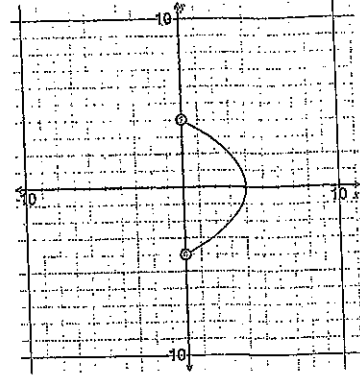


(a) Is it a function?

(b) Domain:

(c) Range:

3.

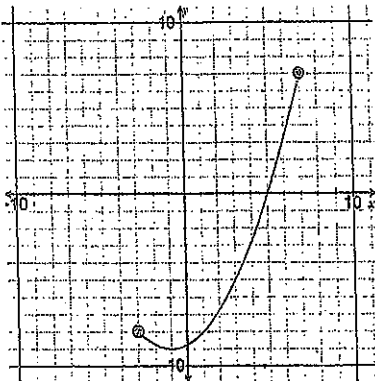


(a) Is it a function?

(b) Domain:

(c) Range:

4.

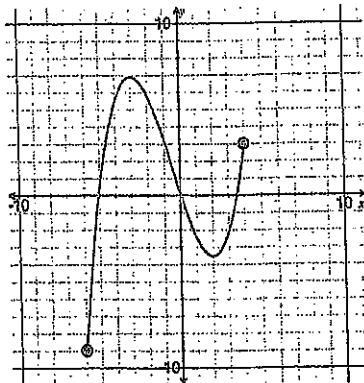


(a) Is it a function?

(b) Domain:

(c) Range:

5.

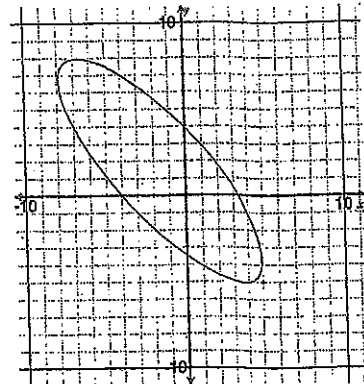


(a) Is it a function?

(b) Domain:

(c) Range:

6.



(a) Is it a function?

(b) Domain:

(c) Range:

